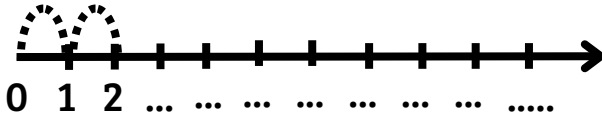


# TABELLINA DELL'1


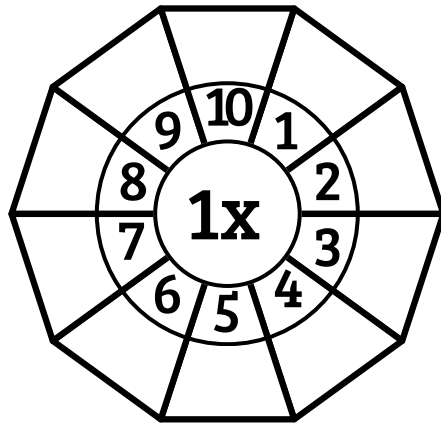
FAI SALTI DA 1 SCRIVI E CERCHIA I NUMERI




QUANTO FA?

SCRIVI IL RISULTATO  
NELLE CASELLE ESTERNE

- 1 x 1 =
- 1 x 2 =
- 1 x 3 =
- 1 x 4 =
- 1 x 5 =
- 1 x 6 =
- 1 x 7 =
- 1 x 8 =
- 1 x 9 =
- 1 x 10 =





SCRIVI IL RISULTATO DELLA  
TABELLINA NELLE CASELLE



X	0	1	2	3	4	5	6	7	8	9	10
1											

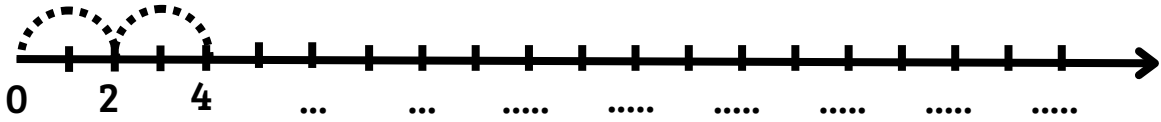
CIRCONDA GRUPPI DA 1





# TABELLINA DEL 2


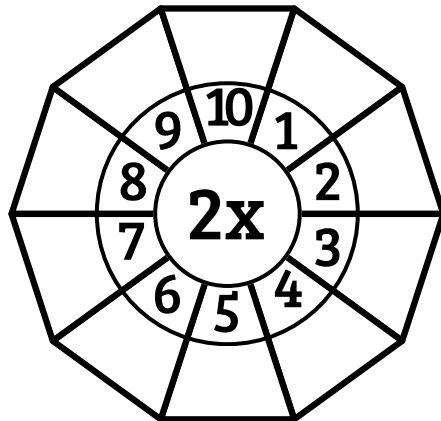
FAI SALTII DA 2 SCRIVI E CERCHIA I NUMERI




QUANTO FA?

SCRIVI IL RISULTATO NELLE CASELLE ESTERNE

- $2 \times 1 =$              $2 \times 6 =$
- $2 \times 2 =$              $2 \times 7 =$
- $2 \times 3 =$              $2 \times 8 =$
- $2 \times 4 =$              $2 \times 9 =$
- $2 \times 5 =$              $2 \times 10 =$





SCRIVI IL RISULTATO DELLA TABELLINA NELLE CASELLE



X	0	1	2	3	4	5	6	7	8	9	10
2											

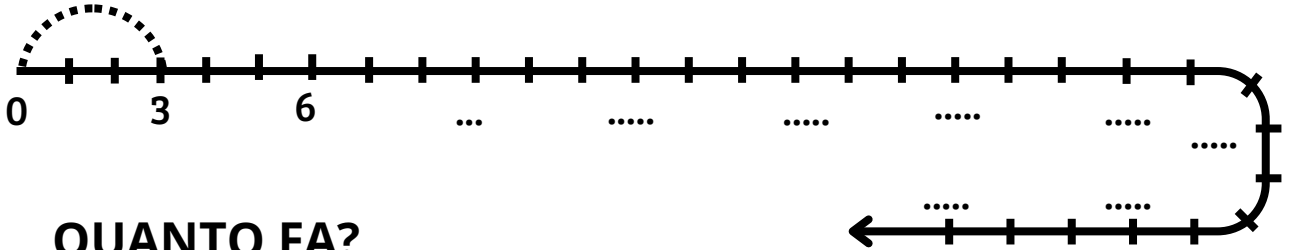
CIRCONDA GRUPPI DA 2





# TABELLINA DEL 3


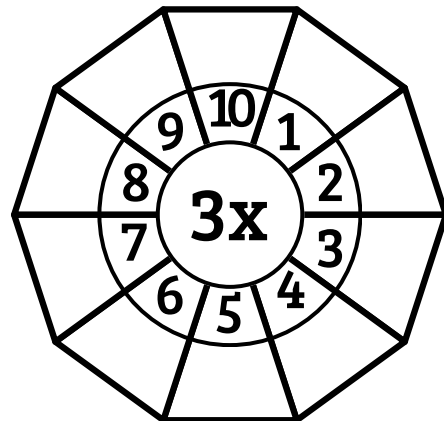
FAI SALTI DA 3 SCRIVI E CERCHIA I NUMERI




QUANTO FA?

- |                |                 |
|----------------|-----------------|
| $3 \times 1 =$ | $3 \times 6 =$  |
| $3 \times 2 =$ | $3 \times 7 =$  |
| $3 \times 3 =$ | $3 \times 8 =$  |
| $3 \times 4 =$ | $3 \times 9 =$  |
| $3 \times 5 =$ | $3 \times 10 =$ |

SCRIVI IL RISULTATO  
NELLE CASELLE ESTERNE





SCRIVI IL RISULTATO DELLA  
TABELLINA NELLE CASELLE



X	0	1	2	3	4	5	6	7	8	9	10
3											

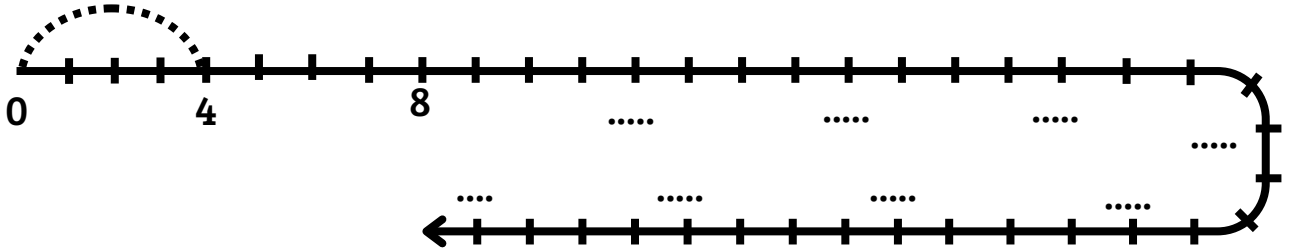
CIRCONDA GRUPPI DA 3





# TABELLINA DEL 4


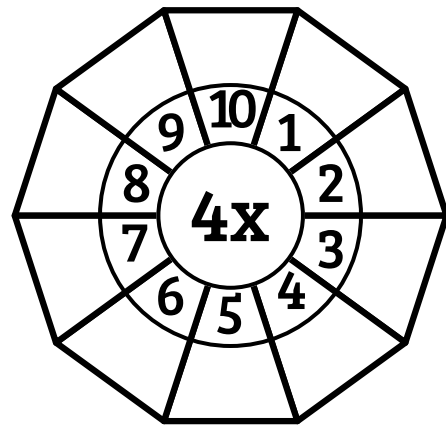
FAI SALTI DA 4 SCRIVI E CERCHIA I NUMERI




QUANTO FA?

- |                |                 |
|----------------|-----------------|
| $4 \times 1 =$ | $4 \times 6 =$  |
| $4 \times 2 =$ | $4 \times 7 =$  |
| $4 \times 3 =$ | $4 \times 8 =$  |
| $4 \times 4 =$ | $4 \times 9 =$  |
| $4 \times 5 =$ | $4 \times 10 =$ |

SCRIVI IL RISULTATO NELLE CASELLE ESTERNE





SCRIVI IL RISULTATO DELLA TABELLINA NELLE CASELLE



X	0	1	2	3	4	5	6	7	8	9	10
4											

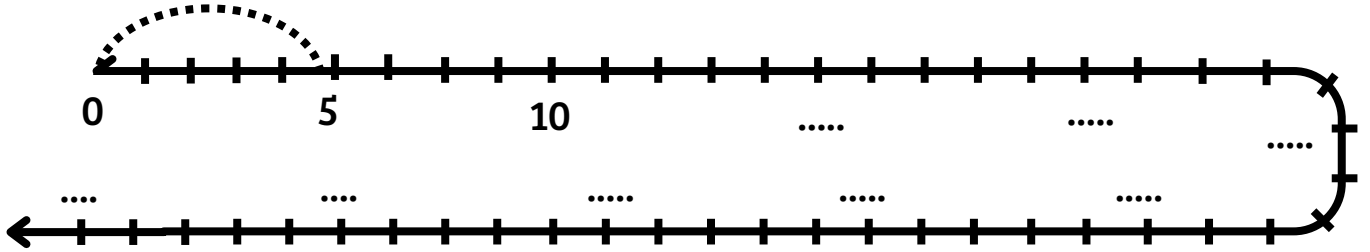
CIRCONDA GRUPPI DA 4





# TABELLINA DEL 5


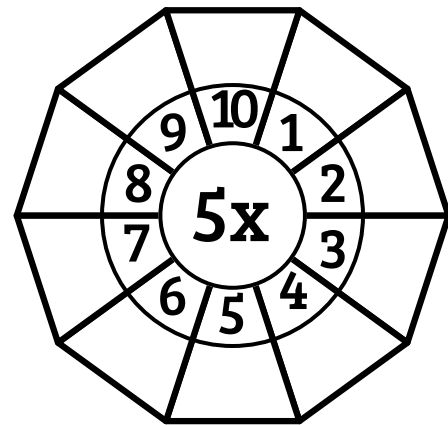
FAI SALTI DA 5 SCRIVI E CERCHIA I NUMERI



QUANTO FA?

- $5 \times 1 =$
- $5 \times 2 =$
- $5 \times 3 =$
- $5 \times 4 =$
- $5 \times 5 =$
- $5 \times 6 =$
- $5 \times 7 =$
- $5 \times 8 =$
- $5 \times 9 =$
- $5 \times 10 =$

SCRIVI IL RISULTATO NELLE CASELLE ESTERNE





SCRIVI IL RISULTATO DELLA TABELLINA NELLE CASELLE



X	0	1	2	3	4	5	6	7	8	9	10
5											

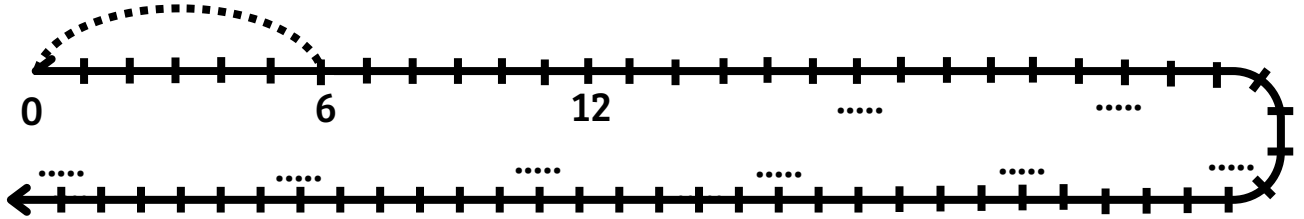
CIRCONDA GRUPPI DA 5





# TABELLINA DEL 6


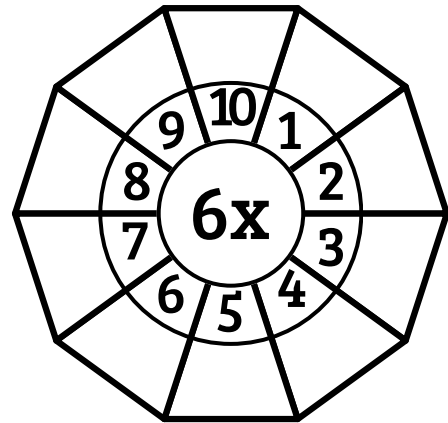
FAI SALTI DA 6 SCRIVI E CERCHIA I NUMERI



QUANTO FA?

- |                |                 |
|----------------|-----------------|
| $6 \times 1 =$ | $6 \times 6 =$  |
| $6 \times 2 =$ | $6 \times 7 =$  |
| $6 \times 3 =$ | $6 \times 8 =$  |
| $6 \times 4 =$ | $6 \times 9 =$  |
| $6 \times 5 =$ | $6 \times 10 =$ |


SCRIVI IL RISULTATO NELLE CASELLE ESTERNE




SCRIVI IL RISULTATO DELLA TABELLINA NELLE CASELLE

X	0	1	2	3	4	5	6	7	8	9	10
6											

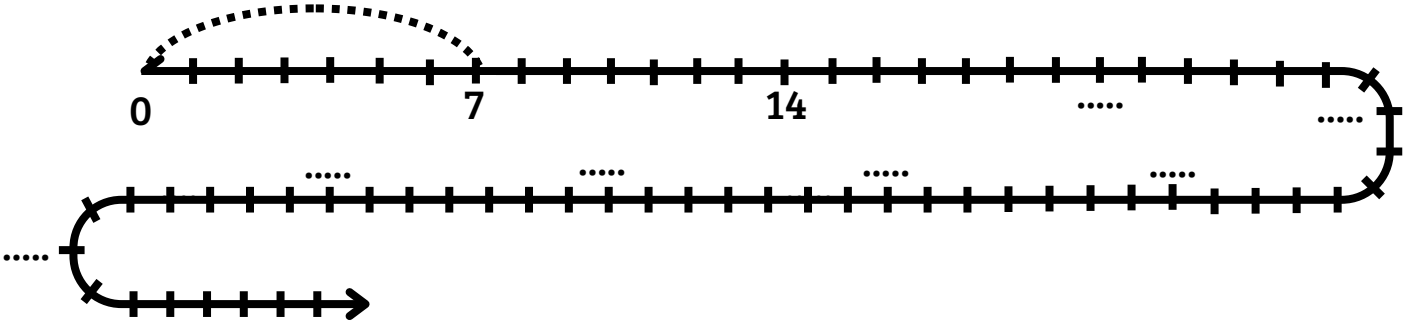
CIRCONDA GRUPPI DA 6





# TABELLINA DEL 7




FAI SALTI DA 7 SCRIVI E CERCHIA I NUMERI



QUANTO FA?

- $7 \times 1 =$        $7 \times 6 =$
- $7 \times 2 =$        $7 \times 7 =$
- $7 \times 3 =$        $7 \times 8 =$
- $7 \times 4 =$        $7 \times 9 =$
- $7 \times 5 =$        $7 \times 10 =$

SCRIVI IL RISULTATO NELLE CASELLE ESTERNE





SCRIVI IL RISULTATO DELLA TABELLINA NELLE CASELLE



X	0	1	2	3	4	5	6	7	8	9	10
7											

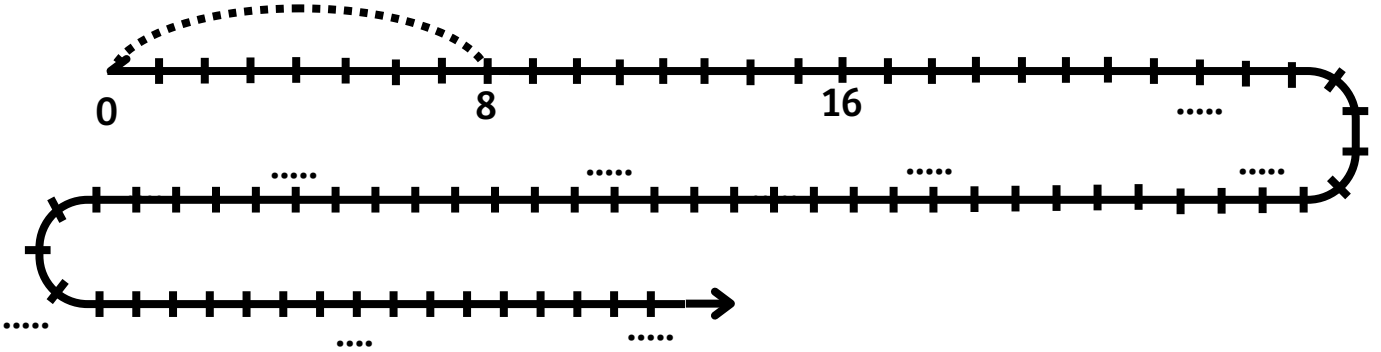
CIRCONDA GRUPPI DA 7





# TABELLINA DELL' 8



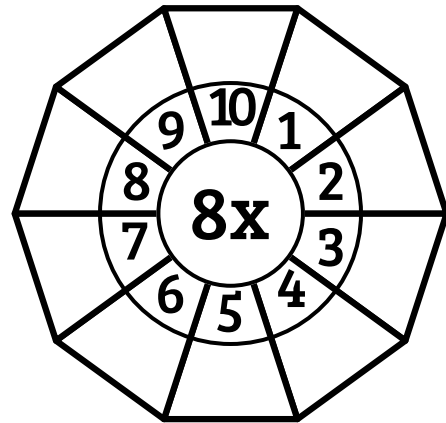
FAI SALTI DA 8 SCRIVI E CERCHIA I NUMERI




QUANTO FA?

- |                |                 |
|----------------|-----------------|
| $8 \times 1 =$ | $8 \times 6 =$  |
| $8 \times 2 =$ | $8 \times 7 =$  |
| $8 \times 3 =$ | $8 \times 8 =$  |
| $8 \times 4 =$ | $8 \times 9 =$  |
| $8 \times 5 =$ | $8 \times 10 =$ |

SCRIVI IL RISULTATO NELLE CASELLE ESTERNE





SCRIVI IL RISULTATO DELLA TABELLINA NELLE CASELLE



X	0	1	2	3	4	5	6	7	8	9	10
8											

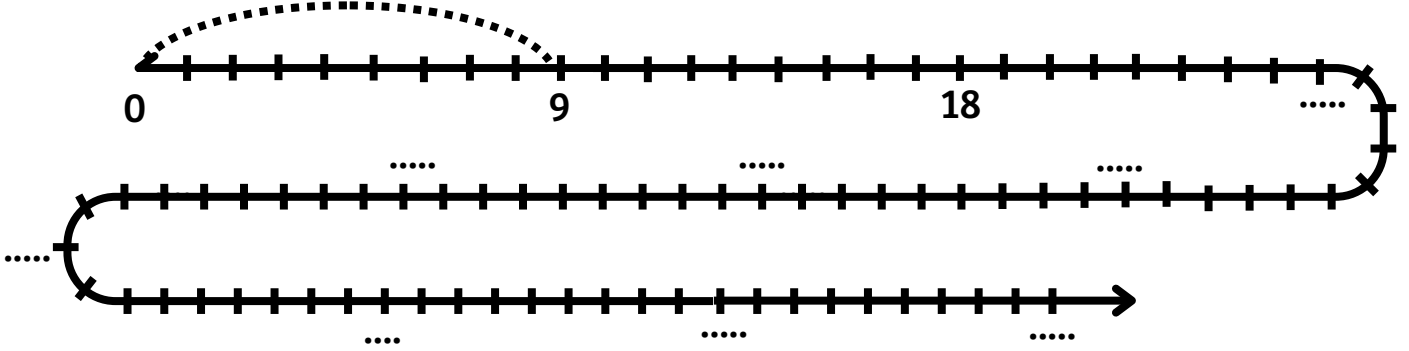
CIRCONDA GRUPPI DA 8





# TABELLINA DEL 9



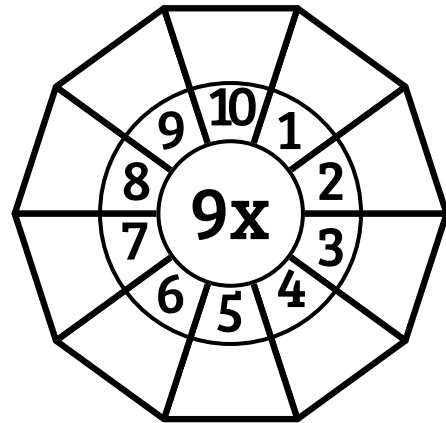
FAI SALTI DA 9 SCRIVI E CERCHIA I NUMERI




QUANTO FA?

- |                |                 |
|----------------|-----------------|
| $9 \times 1 =$ | $9 \times 6 =$  |
| $9 \times 2 =$ | $9 \times 7 =$  |
| $9 \times 3 =$ | $9 \times 8 =$  |
| $9 \times 4 =$ | $9 \times 9 =$  |
| $9 \times 5 =$ | $9 \times 10 =$ |

SCRIVI IL RISULTATO NELLE CASELLE ESTERNE





SCRIVI IL RISULTATO DELLA TABELLINA NELLE CASELLE



X	0	1	2	3	4	5	6	7	8	9	10
9											

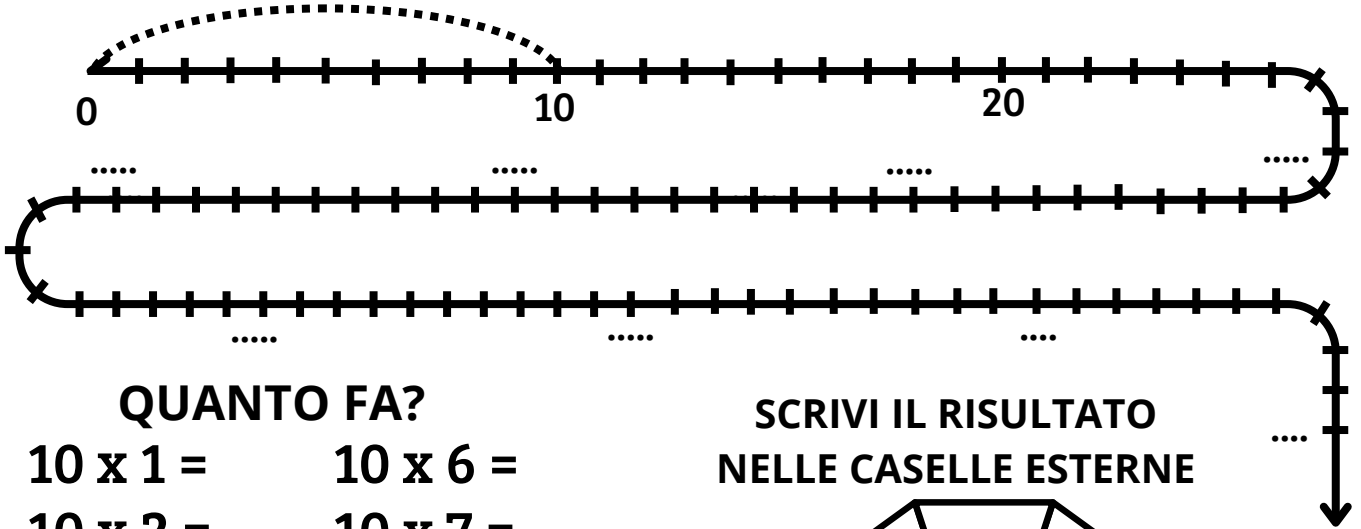
CIRCONDA GRUPPI DA 9





# TABELLINA DEL 10




FAI SALTI DA 10 SCRIVI E CERCHIA I NUMERI




QUANTO FA?

- |                 |                  |
|-----------------|------------------|
| $10 \times 1 =$ | $10 \times 6 =$  |
| $10 \times 2 =$ | $10 \times 7 =$  |
| $10 \times 3 =$ | $10 \times 8 =$  |
| $10 \times 4 =$ | $10 \times 9 =$  |
| $10 \times 5 =$ | $10 \times 10 =$ |

SCRIVI IL RISULTATO NELLE CASELLE ESTERNE



SCRIVI IL RISULTATO DELLA TABELLINA NELLE CASELLE



X	0	1	2	3	4	5	6	7	8	9	10
9											

CIRCONDA GRUPPI DA 10

